


Name: \_\_\_\_\_

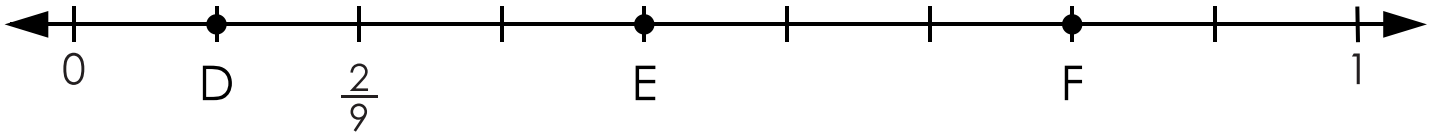
# Fractions on Number Lines



A =

B =

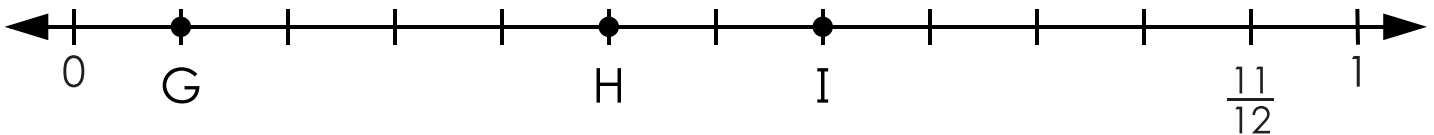
C =



D =

E =

F =




G =

H =

I =

# ANSWER KEY

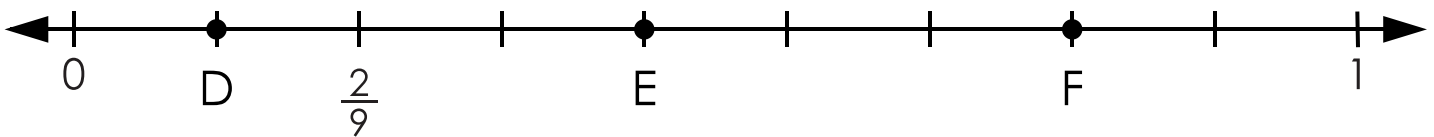
## Fractions on Number Lines



$$A = \frac{1}{5}$$

$$B = \frac{2}{5}$$

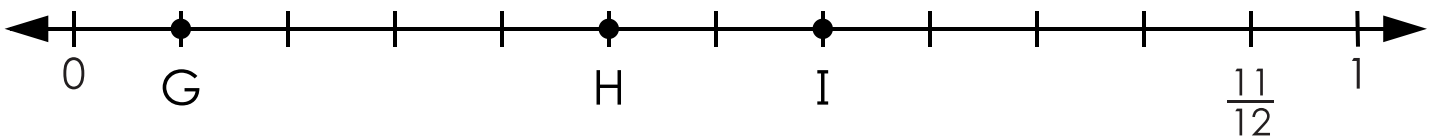
$$C = \frac{4}{5}$$



$$D = \frac{1}{9}$$

$$E = \frac{4}{9}$$

$$F = \frac{7}{9}$$



$$G = \frac{1}{12}$$

$$H = \frac{5}{12}$$

$$I = \frac{7}{12}$$