


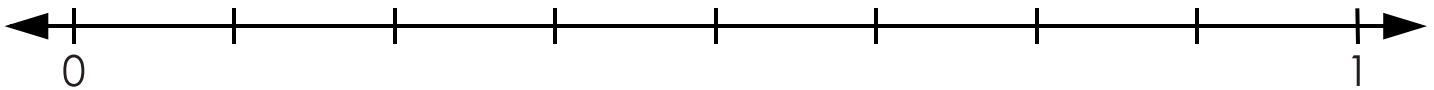
Name: \_\_\_\_\_

# Fractions on Number Lines

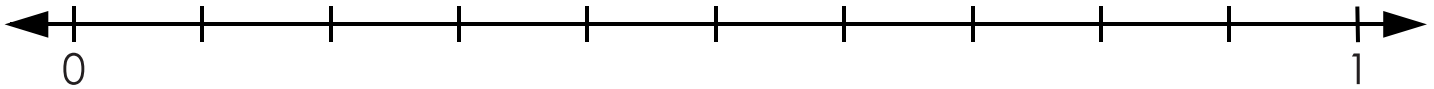
On the number line below label  $\frac{1}{5}$ ,  $\frac{2}{5}$ ,  $\frac{3}{5}$ , and  $\frac{4}{5}$ .




On the number line below label  $\frac{1}{8}$ ,  $\frac{3}{8}$ ,  $\frac{5}{8}$ , and  $\frac{7}{8}$ .



On the number line below label  $\frac{3}{10}$ ,  $\frac{7}{10}$ , and  $\frac{9}{10}$ .




On the number line below label  $\frac{3}{7}$ ,  $\frac{4}{7}$ ,  $\frac{5}{7}$ , and  $\frac{6}{7}$ .

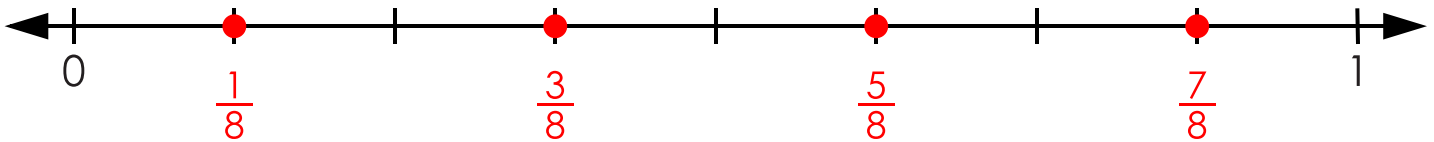


## Fractions on Number Lines

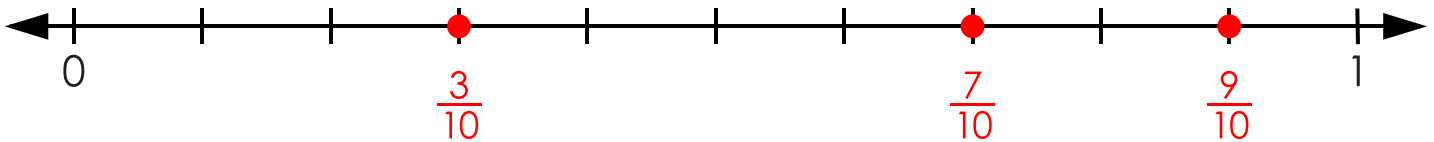
On the number line below label  $\frac{1}{5}$ ,  $\frac{2}{5}$ ,  $\frac{3}{5}$ , and  $\frac{4}{5}$ .



On the number line below label  $\frac{1}{8}$ ,  $\frac{3}{8}$ ,  $\frac{5}{8}$ , and  $\frac{7}{8}$ .



On the number line below label  $\frac{3}{10}$ ,  $\frac{7}{10}$ , and  $\frac{9}{10}$ .



On the number line below label  $\frac{3}{7}$ ,  $\frac{4}{7}$ ,  $\frac{5}{7}$ , and  $\frac{6}{7}$ .

